

Instructions : Each question has four options. There is only one correct answer to each question. Choose the **MOST APPROPRIATE** option and darken/blacken the corresponding circle on the OMR Answer Sheet.

SECTION - 'A' : MATHEMATICS

01 In a polygon, sum of interior angles is 360° . Its diagonals are equal but not all the sides. What is that polygon?

- (1) Parallelogram
- (2) Rhombus
- (3) Rectangle
- (4) Square

02 If circumference of a circle is 88 cm, then the area of the circle (in cm^2) is (use $\pi = \frac{22}{7}$) :

- (1) 600
- (2) 612
- (3) 616
- (4) 620

003 Numbers 1 to 40 are written on different cards (one number on one card) and kept in a box. One card is picked up from the box. What is the probability that the card shows a perfect square number?

- (1) $\frac{1}{8}$
- (2) $\frac{1}{5}$
- (3) $\frac{3}{20}$
- (4) $\frac{1}{10}$

004 6 identical pipes can fill a tank in one hour and 30 minutes. How long will it take to fill the tank if 3 pipes stop working after filling half the tank?

- (1) 135 minutes
- (2) 125 minutes
- (3) 110 minutes
- (4) 130 minutes

005 A certain number of men can complete a work in 50 days. If there were 6 men more, the work can be finished in 10 days less. The number of men originally working are:

- (1) 36
- (2) 30
- (3) 28
- (4) 24

$\frac{6}{40} = \frac{3}{20}$

$\frac{6}{30} = \frac{2}{15}$
 $\frac{3}{15} = \frac{1}{5}$
 $\frac{1}{5} = \frac{2}{10}$
 $\frac{2}{10} = \frac{1}{5}$

06 If one angle of a triangle is 63° and remaining two angles are in the ratio $1 : 2$, then the measure of the largest angle of the triangle, is :

- (1) 63°
 (2) 70°
 (3) 78°
 (4) 82°

07 If $a : b : c : d = 1 : 2 : 3 : 5$, then the value of $\frac{a^2 + b^2 + c^2}{b^2 + c^2 + d^2}$, is : $\frac{14}{38} = \frac{7}{19}$

- (1) $\frac{7}{19}$
 (2) $\frac{19}{5}$
 (3) $\frac{8}{17}$
 (4) $\frac{4}{21}$

Atul drives a car at a speed of 48 km/h and starts his journey for his hometown 132 km away from residence at 9 am . At what time, will he reach his hometown?

- (1) 11 am
 (2) $11:20 \text{ am}$
 (3) $11:40 \text{ am}$
 (4) $11:45 \text{ am}$

009 If the points $A(3, 0)$ and $B(0, 4)$ are joined, then what will be the area of the triangle formed by AB and the coordinate axes?

- (1) 5 unit^2
 (2) 6 unit^2
 (3) 7 unit^2
 (4) 12 unit^2

010 If in polyhedron, V stands for number of vertices, F stands for number of faces and E stands for number of edges, then which of the following cannot be true for a polyhedron?

- (1) $V = 8 \quad F = 6 \quad E = 12$
 (2) $V = 5 \quad F = 5 \quad E = 8$
 (3) $V = 6 \quad F = 5 \quad E = 10$
 (4) $V = 4 \quad F = 4 \quad E = 6$

011 All faces of a cube of side 5 cm are red painted and is cut into smaller cubes of side one cm . What is the total volume of smaller cubes formed, which have no face with red colour?

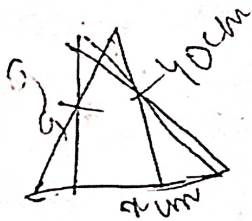
- (1) 54 cm^3
 (2) 45 cm^3
 (3) 34 cm^3
 (4) 27 cm^3

012 What is the greatest value of A for which the 6 digit number 326A50 is divisible by 3?

- (1) 2
- (2) 6
- (3) 8
- (4) 9

013 $\frac{7}{3} + \frac{7}{3} \div \frac{14}{3} - \frac{1}{7} \div \left(-\frac{14}{49}\right) =$

- (1) $\frac{7}{3}$
- (2) $\frac{3}{2}$
- (3) $\frac{10}{3}$
- (4) $\frac{1}{2}$



014 If two perpendicular sides of a triangle are 9 cm and 40 cm and length of the side opposite to right angle is x cm, then the value of x, is :

- (1) 39
- (2) 40
- (3) 41
- (4) 42

$B^2 = 4^2 - P^2$
 $B^2 = 40^2 - 9^2$
 $B = \sqrt{1600 - 81}$
 $B = \sqrt{1519}$
 $B = 41$

015 The value of a car depreciates at 10% per annum. Jayant bought the car for ₹ 8,00,000. What will be its value after 3 years?

- (1) ₹ 5,83,000
- (2) ₹ 5,83,890
- (3) ₹ 5,92,000
- (4) ₹ 5,83,200

$800000 \times \frac{9}{10} \times \frac{9}{10} \times \frac{9}{10}$

$$\begin{array}{r} 27 \\ 729 \\ 9 \\ \hline 5832 \end{array}$$

016 The median of the data set 3, 11, 8, 9, 6, 7, 12, is

- (1) 6
- (2) 7
- (3) 8
- (4) 9

31.8
 6.1
 $\hline 25.7$
 5

017 The average height of 6 boys is 5' 3". If one boy is 6' 1" tall, then the average height of remaining boys, is

- (1) 5'
- (2) 5' 1"
- (3) 5' 2"
- (4) 5' 4"

$5' 3''$ $5' 4''$
 $\hline 6' 1''$

018 By which smallest number, 2700 must be multiplied so that the new number is a perfect cube?

- (1) 6
- (2) 10
- (3) 15
- (4) 18

$$\begin{array}{r}
 27 \\
 \times 6 \\
 \hline
 162 \\
 3 \\
 \hline
 270 \\
 \times 27 \\
 \hline
 1890 \\
 2700 \\
 \hline
 48600
 \end{array}$$

019 The number of zeros at the end of number $1 \times 2 \times 3 \times 4 \times \dots \times 20$, is

- (1) 6
- (2) 4
- (3) 5
- (4) 3

20 The cost of 5 kg apples is ₹ 425, the cost of 12 dozen oranges is ₹ 744 and the cost of 4 kg mangoes is ₹ 480. What is the total cost of 8 kg apples, 8 dozen oranges and 8 kg mangoes?

- (1) ₹ 1,416
- (2) ₹ 2,136
- (3) ₹ 1,826
- (4) ₹ 2,756

$$\begin{array}{r}
 18672 \\
 62744 \\
 31144 \\
 72 \\
 36 \\
 12 \\
 \hline
 60 \\
 480 \\
 \hline
 \hline
 \end{array}$$

021 Pawan bought a second hand TV for ₹ 4,300. He spent ₹ 500 on its repair and sold it for ₹ 5,856. In this transaction, his gain was :

- (1) 20%
- (2) 21%
- (3) 22%
- (4) 24%

$$\begin{array}{r}
 \text{P\%} = \frac{\text{CP} \times 100}{\text{SP}} \\
 \frac{22}{100} \times 100 \\
 \frac{4800}{4000} \times 100 = 120\% \\
 120\% - 100\% = 20\%
 \end{array}$$

022 There are 120 students in a hostel and there is food provision for 25 days. How long would these provisions last out if 30 more students join the group?

- (1) 30 days
- (2) 22 days
- (3) 20 days
- (4) 17 days

$$\begin{array}{r}
 120 \times 25 = 3000 \\
 3000 \div 150 = 20
 \end{array}$$

023 If an item is sold at ₹ 1,292 after giving a discount of 15%, then the marked price of the item is :

- (1) ₹ 1,480
- (2) ₹ 1,500
- (3) ₹ 1,520
- (4) ₹ 1,530

$$\begin{array}{r}
 1292 \div 0.85 = 1520
 \end{array}$$

024 6 kg of metal A and 24 kg of metal B are melt together to form an alloy. The percentage of metal A in the alloy is :

- (1) 20%
- (2) 25%
- (3) $33\frac{1}{3}\%$
- (4) 30%

$$\frac{30}{100} = \frac{3}{10}$$

025 What smallest number should be subtracted from 3142 to get a perfect square?

- (1) 5
- (2) 6
- (3) 7
- (4) 8

$$\begin{array}{r} 3137 \\ - 5 \\ \hline 3132 \end{array}$$

$$\begin{array}{r} 3136 \\ - 6 \\ \hline 3130 \end{array}$$

$$\begin{array}{r} 3135 \\ - 7 \\ \hline 3128 \end{array}$$

$$\begin{array}{r} 3134 \\ - 8 \\ \hline 3126 \end{array}$$

026 If alphabets A, B, C, ... are represented by numbers 1, 2, 3, ..., then the value of $\sqrt{Z-A}$, is :

- (1) 5
- (2) 4
- (3) 7
- (4) 11

$$\sqrt{26-1} = \sqrt{25} = 5$$

027 If $(a^8 + \frac{1}{a^8}) (a^4 + \frac{1}{a^4}) (a^2 + \frac{1}{a^2})$

$$(a + \frac{1}{a}) (a - \frac{1}{a}) = a^b - \frac{1}{a^b},$$

then value of b, is :

- (1) 8
- (2) 16
- (3) 32
- (4) 64

028 In a fruitstore, there are $4(a^2 - \frac{2}{3}b^2)$ boxes and in each box there are $(\frac{3}{4}a^2 + 3b^2)$ apples. How many apples are there in the store?

$$(1) 3a^4 + 10a^2b^2 - 8b^4$$

$$(2) 3a^4 + 12a^2b^2 + 8b^4$$

$$(3) 12a^4 + 10a^2b^2 + 6b^4$$

$$(4) 12a^4 + 12a^2b^2 - 6b^4$$

029 If $x = \frac{4ab}{a+b}$, then the value of

$$\frac{x+2a}{x-2a} + \frac{x+2b}{x-2b}, \text{ is :}$$

$$(1) \frac{2ab}{(a+b)^2}$$

$$(2) 2$$

$$(3) 4$$

$$(4) \frac{4ab}{(a+b)^2}$$

$$\frac{4a^2 - 3b^2}{3a^2 + 3b^2}$$

030 If 8 is multiplied with 7 more than a number, it becomes the same as 15 is added to 3 times the same number. This can be represented by which of the following equations?

- (1) $7(8+x) = 3x + 15$
- (2) $56+x = 3x + 15$
- (3) $8(7+x) = 15 + 3x$
- (4) $56x + 1 = 3(x+5)$

$$\begin{array}{r} 124 \\ \times 44 \\ \hline 496 \\ 4960 \\ \hline 21200 \end{array}$$

031 $\{44(x^4 - 5x^3 - 24x^2)\} \div \{11x(x-8)\} =$

- (1) $4x(x+3)$
- (2) $7x(x+2)$
- (3) $5x(x+4)$
- (4) $(x+2)(x+3)$

$$(x^2 + 3x)(2x + 6)$$

032 If the area of a circle is 2464 cm^2 , then the radius of the circle (in cm), is (use $\pi = \frac{22}{7}$):

- (1) 24
- (2) 26
- (3) 28
- (4) 56

$$2464 = \pi r^2$$

$$2464 = \frac{22}{7} \times r^2$$

$$2464 \times 7 = 22 \times r^2$$

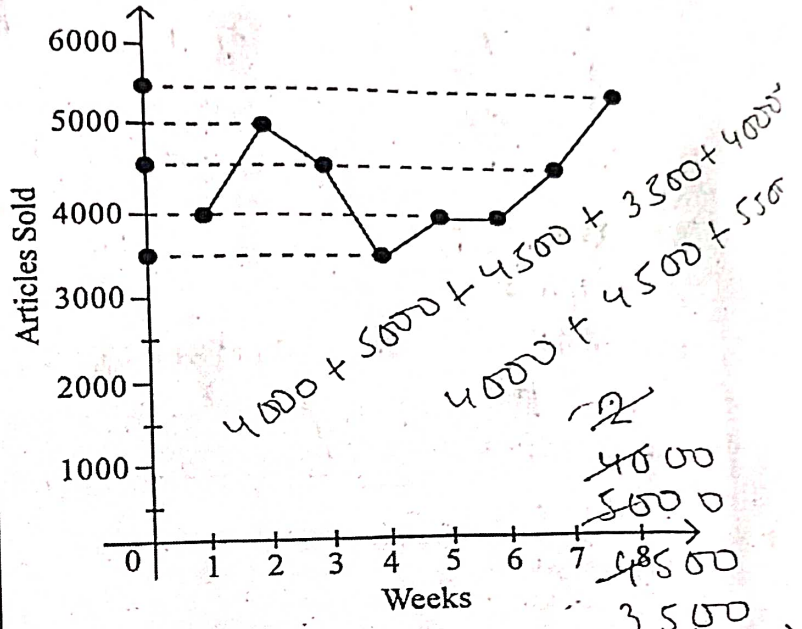
$$17248 = 22 \times r^2$$

$$r^2 = \frac{17248}{22} = 784$$

$$r = \sqrt{784} = 28$$

$$8x(1+x) - 15 + 3(8+x)$$

033 The given line graph shows the number of articles sold by a company in the first 8 weeks of a particular year.



036 What is the average number of articles sold in 8 weeks?

- (1) 5892
- (2) 4875
- (3) 4375
- (4) 2945

$$4000 + 5000 + 4500 + 3500 + 4000 + 4000 + 4500 + 5300 = 35000$$

$$\frac{35000}{8} = 4375$$

034 If $a = \sqrt{2} + 1$, $b = \sqrt{3} - \sqrt{2}$ and $c = \sqrt{6} + 2\sqrt{2}$ then the value of $a^2 + b^2 - c$, is:

- (1) 8
- (2) $8 - 3\sqrt{6}$
- (3) $8 + 4\sqrt{2}$
- (4) $11 - 3\sqrt{6}$

$(5a - 7b) - (-5b - 7b)$
 $(5a + 7b) - (-5b - 7b)$
 035 $(2.5a - 3.5b)^2 - (3.5a - 2.5b)^2 =$

- (1) $-6a^2 - 6b^2$
 (2) $6b^2 - 6a^2$
 (3) $6a^2 + 6b^2$
 (4) $6a^2 - 6b^2$
- $12a - (-12b)$
 $12a + 12b$
 $24 \times 10 \times 10$

- 036 If 30% of $(A + B) = 50\%$ of $(A - B)$, then $A : B$ is :
- (1) 3 : 5
 (2) 5 : 3
 (3) 4 : 1
 (4) 1 : 4

037 $\sqrt[3]{27} - 2 \times \sqrt[3]{8} + \sqrt[3]{125} =$

$3 - 2 \times 2 + 5$
 $3 - 4 + 5$
 $-1 + 5$
 4

(1) 4
 (2) 3
 (3) 2
 (4) 1

- 038 The average of first five prime numbers is :
- (1) 3.6
 (2) 5
 (3) 5.2
 (4) 5.6
- $2, 3, 5, 7, 11$
 568
 31
 17
 $+ 11$
 28
 $\rightarrow 38$

- 039 Two cubes have their surface areas in the ratio 4 : 9. What is the ratio of their volumes?
- (1) 64 : 729
 (2) 8 : 27
 (3) 9 : 4
 (4) 2 : 3

- 040 4 equal cuboids with dimensions 6 cm \times 10 cm \times 4 cm are joined side by side. The volume of the solid so formed, is :
- (1) 240 cubic cm
 (2) 480 cubic cm
 (3) 864 cubic cm
 (4) 960 cubic cm
- 60×4
 240
 $\times 4$
 960

- 041 Ritu is four years younger than her brother Varun. After 5 years, the sum of their ages will be 70 years. What is the present age of Ritu?
- (1) 30 years
 (2) $25\frac{1}{2}$ years
 (3) 28 years
 (4) 32 years
- $(26 - 4) + 5x$

- 042 Out of a certain number of marbles, $(\frac{3}{5})^{\text{th}}$ are red and half of the remaining are green. If the number of green marbles is 12, then how many are red marbles?
- (1) 24
 (2) 36
 (3) 9
 (4) 18
- $24 \times 5 + 3$
 $120 + 3$
 123
 24
 $9, 4$
 108

043 How many sides does a regular polygon have if each of its interior angle is 156° ?

- (1) 9
- (2) 12
- (3) 15
- (4) 20

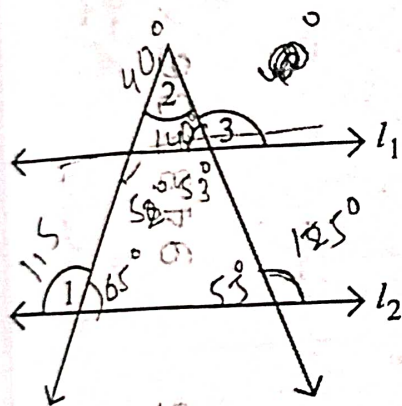
948336



044 In the figure, l_1 is parallel to l_2 and $\angle 1 = 115^\circ$, $\angle 2 = 40^\circ$, then $\angle 3$ is equal to:

to:

948336



948336

$$\begin{array}{r} 180 \\ - 115 \\ \hline 65 \end{array}$$

- (1) 115°
- (2) 110°
- (3) 105°
- (4) 100°

948336

$$65 + x + x + 1 + x + 2$$

$$65 + 3x + 3$$

$$68 + 3x = 360$$

$$3x = 360 - 68$$

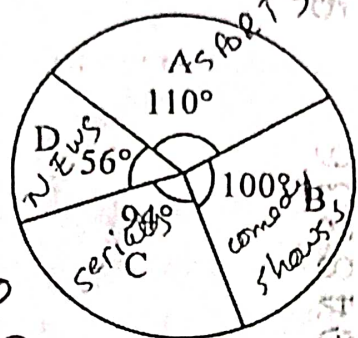
$$3x = 292$$

$$x = \frac{292}{3}$$

045 Survey was done on 900 schools children about their choice of TV programmes -

- A. Sports
- B. Comedy shows
- C. Serials
- D. News

Their choices are shown in the Pie chart.



$$\frac{100}{360} \times 900 = 250$$

How many children showed interest for Comedy shows?

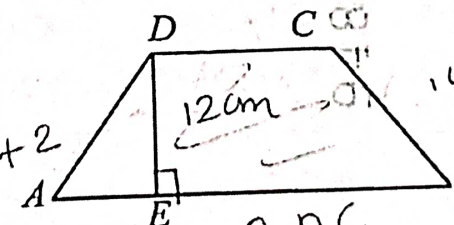
- (1) 235
- (2) 250
- (3) 265
- (4) 275

948336

$$\frac{100}{360} \times 900 = 250$$

046 ABCD is a trapezium in which $AB \parallel DC$ and $DE \perp AB$. If $AB = 2DC$, $DE = 12$ cm and area of ABCD = 144 cm^2 , then the length of AB, is:

- (1) 16 cm
- (2) 10 cm
- (3) 8 cm
- (4) 20 cm



$$144 = \frac{1}{2} (a+b) \times 12$$

$$144 = 6(a+b)$$

$$24 = a+b$$

$$24 = 2DC + DC$$

$$24 = 3DC$$

$$DC = 8$$

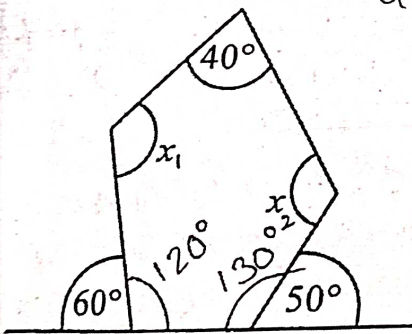
$$AB = 2DC = 16$$

047 Which of the following statements are true?

- A. Cube of any odd number is odd.
- B. Cube of a single digit number cannot be a single digit number.
- C. A perfect cube may end with exactly two zeroes.
- D. Cube of a 2-digit number has at least 3 digits.

- (1) A, B, C only
- (2) B, C, D only
- (3) A, B, D only
- (4) A, D only

048 The value of x from the following figure, is:



- (1) 35°
- (2) 70°
- (3) 125°
- (4) 250°

049 Madan scored marks given in the following table. Every paper was of 100 marks.

Mnths	English	Hindi	Science	Social Science
95	72	80	68	65

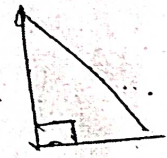
His average marks per subject is:

- (1) 72
- (2) 74
- (3) 75
- (4) 76

$$\begin{array}{r}
 95 \\
 72 \\
 68 \\
 65 \\
 \hline
 300 \\
 \hline
 75
 \end{array}$$

050 Which of the following triangles with given sides is not a right-angled triangle?

- A. 3, 4, 5
- B. 5, 12, 13
- C. 6, 7, 8
- D. 6, 8, 10



- (1) A
- (2) D
- (3) B
- (4) C

Instructions : Each question has four options. There is only one correct answer to each question. Choose the MOST APPROPRIATE option and darken/blacken the corresponding circle on the OMR Answer Sheet.

SECTION - 'B' : INTELLIGENCE

051 Find the odd one out :

- (1) BCD
- (2) KMN
- (3) GHI
- (4) WXY

052 Anil, Bobby, Chetan, Deepak and Elen are five friends. Anil is shorter than Bobby but taller than Elen. Chetan is the tallest. Deepak is shorter than Bobby and taller than Anil. Who is in the middle with respect to their heights?

- (1) Bobby
- (2) Chetan
- (3) Deepak
- (4) Anil

053 If February 1, 2004 was Wednesday, what day was March 12th 2004?

- (1) Sunday
- (2) Saturday
- (3) Tuesday
- (4) Monday

054 Complete the analogy.

Lizard : Reptile :: Whale : ?

- (1) Rodent
- (2) Amphibian
- (3) Mammal
- (4) Ocean

055 Find the missing number in the following series :

1, 9, 25, 49, ?, 121

- (1) 64
- (2) 81
- (3) 91
- (4) 100

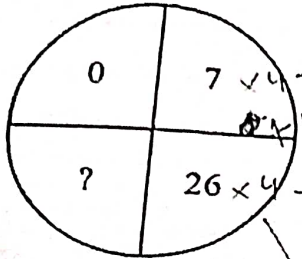
056 Arrange the following in the chronological order.

- A. Birth (1)
- B. Death (4)
- C. Funeral (5)
- D. Marriage (3)
- E. Education (2)

Choose the correct answer from the options given below.

- (1) A, E, D, C, B
- (2) A, C, D, E, B
- (3) A, E, D, B, C
- (4) A, E, B, D, C

057 Find the missing number out of the options given below :



- (1) 45
- (2) 60
- (3) 63**
- (4) 76

059 Find the odd one out :

- (1) Pen
- (2) Sharpener
- (3) Scale
- (4) Stationery**

060 How many such 5's are there in the following number sequence each of which is immediately preceded by 3 or 4 but not immediately followed by 8 or 9?

3 5 9 5 4 5 5 3 5 8 4 5 6 7 3 5 7 5 5 4 5 2 3
5 1 0

- (1) 3
- (2) 4
- (3) 5**
- (4) 6

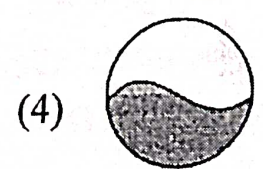
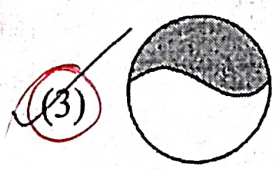


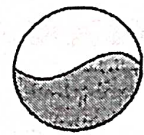
058 Arrange the following in a logical order (Increasing order).

- A. Day
- B. Week
- C. Second ✓
- D. Minute ✓
- E. Hour ✓

Choose the correct answer from the options given below.

- (1) A, B, C, D, E
- (2) C, D, E, B, A
- (3) C, D, B, E, A
- (4) C, D, E, A, B**

061 Identify the correct water image of the following figure.

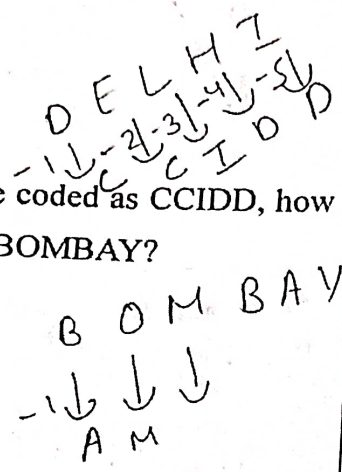


062 A number is greater than 3 but less than 8.
Also, it is greater than 6 but less than 10.
The number is :

7

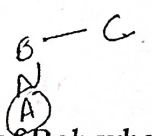
- (1) 5
- (2) 6
- (3) 7
- (4) 8

063 If DELHI can be coded as CCIDD, how would you code BOMBAY?



- (1) AJMTVT
- (2) AMJXVS
- (3) MJXVSU
- (4) WXYZAX

064 Amit is standing in the North of Bob who is in the West of Chetan on a ground. The position of Amit with respect to Chetan is in the direction :

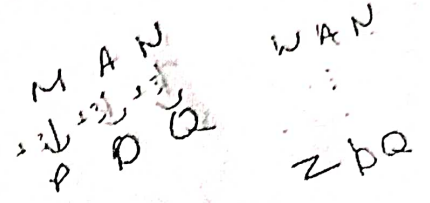


- (1) East
- (2) North-West
- (3) North-South
- (4) North

065 Complete the analogy.

MAN : PDQ :: WAN : ?

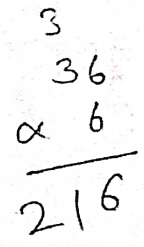
- (1) NAW
- (2) ZDQ
- (3) YDQ
- (4) YQD



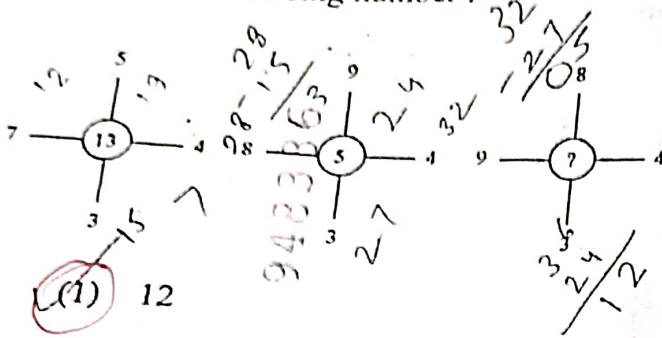
066 Complete the analogy.

25⁴⁵ : 125 :: 36 : ?

- (1) 126
- (2) 206
- (3) 216
- (4) 318



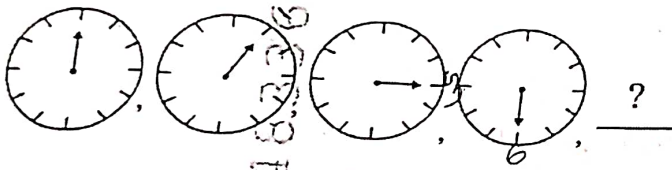
067 Find the missing number :



- (1) 12
- (2) 14
- (3) 15
- (4) 18

948336

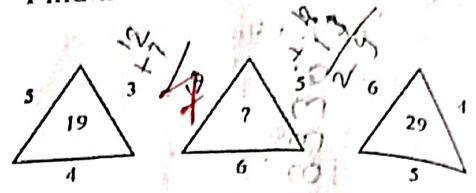
068 Find the next pattern in the sequence.



- (1)
- (2)
- (3)
- (4)

948336

069 Find the missing number :



- (1) 25
- (2) 37
- (3) 41
- (4) 47

948336

070 Complete the analogy :

$x^9 / 4 \times 8$
 $3 : 11 :: 7 : ?$

- (1) 42
- (2) 29
- (3) 38
- (4) 51

948336

071 Complete the following analogy :

$Y : 2 :: T : ?$

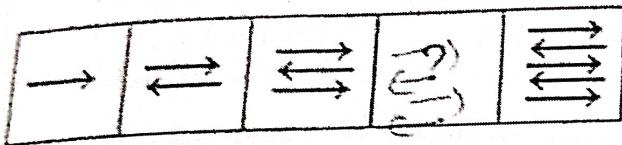
- (1) 9
- (2) 7
- (3) 8
- (4) 12

948336

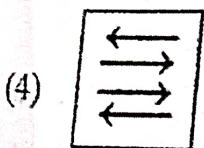

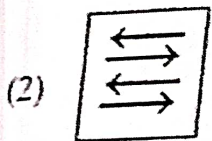
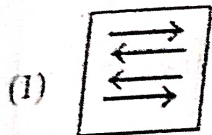
072 Find the next pattern in the sequence.



073 Replace the question mark in the following series :



Choose the correct answer from the options given below.



074 Arrange the following words as per order in the dictionary.

- A. Consume
- B. Consciousness
- C. Conscience
- D. Conservation
- E. Consequence

Choose the correct answer from the options given below.

- (1) C, B, A, E, D
- (2) C, A, B, E, D
- (3) C, E, B, D, A
- (4) C, B, E, D, A

075 Find the odd one out :

- (1) 13
- (2) 17
- (3) 37
- (4) 63

Instructions : Each question has four options. There is only one correct answer to each question. Choose the MOST APPROPRIATE option and darken/blacken the corresponding circle on the OMR Answer Sheet.

SECTION - 'C' : ENGLISH

076 Superlative degree of 'Top' is :

- (1) Topèst
- (2) Topmost
- (3) Toppest
- (4) Most Top

077 Choose the correct option indicating the meaning of the given sentence :

She is too slow to be a runner.

- (1) She is so slow to be a runner.
- (2) She is slow to run.
- (3) She is so slow that she cannot be a runner.
- (4) She is too slow, she couldn't be a runner.

078 Choose the correct Question Tag for the following sentence :

It is quite hot outside today, _____ ?

- (1) is it
- (2) isn't it
- (3) doesn't it
- (4) aren't it

079 Spot the error :

He is | the carpenter | who | made my chair.

- (A) (B) (C) (D)
- (1) A
- (2) B
- (3) D
- (4) No error

080 Change the given sentence to indirect narration :

Rita said to me, "I never eat junk food."

- (1) Rita told me that she never ate junk food.
- (2) Rita said to me that she never eats junk food.
- (3) Rita said that she never ever eats junk food.
- (4) Rita told me that I never ate junk food.

081 Change the given sentence to indirect narration :

They said to Rahul, "We are watching cricket."

- (1) They said Rahul that they are watching cricket.
- (2) They told Rahul that they were watching cricket.
- (3) They told Rahul that they are watching cricket.
- (4) They told Rahul that they have been watching cricket.

082 Change the given sentence to Passive Voice :

People speak different languages all over the world.

- (1) Different languages are spoken all over the world.
- (2) Different languages were being spoken all over the world.
- (3) Different languages was spoken all over the world.
- (4) Different languages were spoken all over the world.

083 Choose the correct meaning of the given Idiom / Phrase :

'Helter skelter'

- (1) Natural and simple
- (2) Here and there
- (3) Merits and demerits
- (4) Arrogant and naughty

084 Choose the correct meaning of the following idiom :

'A wolf in a sheep's clothing'

- (1) A very relatable person
- (2) A weak person
- (3) A fair and honest person
- (4) A dangerous person pretending to be a harmless person

085 Choose the correct conjunction for the following :

This is the ring _____ she gifted me.

- (1) beside
- (2) where
- (3) that
- (4) if

086 Fill in the blank :

Neither she _____ he was present in the class.

- (1) nor
- (2) or
- (3) and
- (4) but

087 Fill in the blank :

_____ she lost her daughter.

- (1) Hello!
- (2) Alas!
- (3) Hurrah!
- (4) Look!

088 Choose the most appropriate option :

Reema is too generous not to help the needy.

- (1) Reema is so generous not to help the needy.
- (2) Reema is so generous that she can help the needy.
- (3) Reema is so generous enough to help the needy.
- (4) Reema is so generous she will help.

089 Obesity affects _____ more than the affluent.

- (1) the middle class
- (2) the educated
- (3) the poor
- (4) the sick

090 'Limiting food choices, however, isn't enough.'

Choose the synonym of underlined word.

- (1) Restricting
- (2) Calculating ✗
- (3) Ignoring ✗
- (4) Restructuring ✗

091 Choose the correct option :

The antonym of 'miser' is

- (1) Rich
- (2) Strong
- (3) Popular
- (4) Generous

092 What did the Walt Disney Company ban?

- (1) Candy bars
- (2) Junk food
- (3) The foods were healthy
- (4) Advertisement for candy bars and junk food

093 What was purpose behind the ban?

- (1) The foods were unhealthy
- (2) The foods were healthy
- (3) The foods were cheap
- (4) The foods were costly

094 Overweight and obesity are the leading causes for global deaths, killing _____ adults each year.

- (1) 2.6 million
- (2) 8 million
- (3) 8.2 million
- (4) 2.8 million

095 Choose the correct sentence having an adverb :

- (1) He waited long for me
- (2) He went on a long journey.
- (3) He came by an early flight.
- (4) He is of my near relation.

096 Change into passive voice :

'Please don't disturb me.'

- (1) You are requested not to disturb me.
- (2) You are requested not disturb me.
- (3) Please do not disturb me.
- (4) You are requested do not disturb me.

097 Fill in the blank with correct conjunction:

She is rich _____ she is not contented.

- (1) since
- (2) yet
- (3) as
- (4) while

098 Choose the correct option from the following :

Her uncle who _____ to her was _____

- (1) had been kind, dead
- (2) was dead, kind
- (3) is dead, kind
- (4) has been kind, dead

099 Fill in the blank with correct preposition:

I saw him climbing _____ the tree to pluck mangoes.

- (1) upon
- (2) on
- (3) up
- (4) over

100 Choose the correct spelt word :

- (1) Autonomus
- (2) Autonomous
- (3) Autonemous
- (4) Autenomus

Instructions: Each question has five options. There is only one correct answer to each question. Choose the MOST APPROPRIATE option and darken/blacken the corresponding circle on the OMR Answer Sheet.

SECTION - 'D' : GENERAL SCIENCE

101 Arrange the rolling, sliding and static friction in increasing order of friction and choose the correct option.

- (1) Rolling, Static, Sliding
- (2) Rolling, Sliding, Static •
- (3) Static, Sliding, Rolling
- (4) Static, Rolling, Sliding

102 Which of the following is not a Rabi crop?

- (1) Wheat
- (2) Pea
- (3) Mustard •
- (4) Paddy

103 Identify the methods for replenishing the soil with nutrients from the following :

- A. Growing different crops alternately.
- B. Usage of manures.
- C. Sowing healthy seeds.
- D. Growing legumes as fodder in one season and wheat crop in the next season.

Choose the correct option from the following :

- (1) A, C and D
- (2) A, B and D •
- (3) A and D
- (4) B and C

104 The magnitude of the power of an earthquake is expressed on a scale called

- (1) Richter scale •
- (2) Vernier scale
- (3) Ratio scale
- (4) Graphic scale

105 Calorific value of a fuel is expressed in :

- (1) Joule
- (2) Kilo Joule per kg (kJ/kg) •
- (3) Kilo Joule
- (4) Kilo Joule/m²

[Contd...

106 Tin cans are made by electro plating tin on to iron because Tin :

- (1) is less reactive than Iron
- (2) is more reactive than Iron
- (3) does not react with Iron
- (4) and Iron both are least reactive

107 The bulb of the dropper, immersed in water is pressed. When the pressure is released, water gets filled in the dropper. This happens due to

- (1) Force of water
- (2) Force of gravity
- (3) Pressure of water
- (4) Atmospheric pressure

108 An oscillating body is making 360 oscillations in 3 minutes. Its frequency in hertz will be

- (1) 120
- (2) 2
- (3) 20
- (4) 12

109 A person who is standing 2 m in front of a plane mirror, seems to be away from his image.

- (1) 2 m
- (2) 4 m
- (3) 0.5 m
- (4) 1 m

110 Which of the following statements are no true for metals?

- A. Metals are good conductor of heat and electricity.
- B. The property of metals by which they can be beaten into thin sheets called ductility.
- C. Metals produce ringing sounds they are said to be Sonorous.
- D. In general metallic oxides are acidic in nature.

Choose the correct option from below

- (1) B and C
- (2) C and D
- (3) B and D
- (4) A, B and D

- 111 Polythene and PVC are examples of :
- (1) Thermoplastics
 - (2) Thermosetting plastics
 - (3) Melamine
 - (4) Bakelite

112 Increase in height during puberty depends on :

- (1) Genes inherited from mother only
- (2) Eating right kind of food and exercise
- (3) Exercise and genes inherited from parents
- (4) Eating right kind of food and genes inherited from parents

113 Consider the following statements :

- A. Endocrine glands release hormones into the blood stream to reach a target site.
- B. Hormones are not chemical substances.

Select the correct answer using the code given below :

- (1) Only A is correct
- (2) Only B is correct
- (3) A and B are correct
- (4) Neither A nor B is correct

114 Which source book keeps a record of all endangered animals and plants?

- (1) Blue Data Book
- (2) Green Data Book
- (3) Red Data Book
- (4) White Data Book

115 Identify the endemic flora of the Pachmarhi Biosphere Reserve from the following :

- (1) Bison and flying squirrel
- (2) Bison and sal
- (3) Sal and wild mango
- (4) Flying squirrel and wild mango

116 When fertilisation does not occur then the released egg and thickened lining of the uterus is shed off. It is called :

- (1) Pregnancy
- (2) Menarche
- (3) Menopause
- (4) Menstruation

[Contd...

117 Match List I with List II :

List I
A. Coke

B. Coal Tar

C. Coal Gas

D. Petrol

List II

I. Obtained during the processing of coal to get coke.

II. Almost pure form of carbon

III. Petroleum

IV. Naphthalene balls

Choose the correct option from the answers given below :

(1) A-I, B-II, C-III, D-IV

(2) A-II, B-IV, C-III, D-I

(3) A-II, B-IV, C-I, D-III

(4) A-III, B-II, C-IV, D-I

118 A combustible substance catches fire/burns as long as its temperature is _____, its ignition temperature.

(1) Higher than

(2) Lower than

(3) Equal to or higher than

(4) Equal to or lower than

119 Which of the following is/are present only in plant cell?

A. Cell membrane

B. Cell wall

C. Chloroplast

D. Nuclear membrane

Select the correct answer using the code given below :

(1) B and C

(2) A and D

(3) B

(4) C

120 Given below are the different stages in the life cycle of frog. Arrange them in order of occurrence.

A. Fertilisation

B. Tadpole

C. Laying of eggs

D. Development of embryos

Choose the correct option from the following :

(1) A, C, B, D

(2) C, A, D, B

(3) C, B, D, A

(4) D, A, C, B

121 When electric current is passed through the Copper Sulphate solution?

- (1) Copper gets deposited on the electrode connected to the positive terminal of the battery.
- (2) Copper gets deposited on the electrode connected to the negative terminal of the battery.
- (3) No reaction takes place
- (4) Copper gets deposited either on positive or on negative terminal of the battery.

122 Match the following :

Heavenly body	Characteristics
A. Orion	I. Small objects revolving around Sun between Mars & Jupiter.
B. Comet	II. Brightest star in the sky located close to Orion.
C. Sirius	III. A constellation can be seen during winter time in late evenings.
D. Asteroid	IV. An object which revolves around Sun in elliptical orbit and has a bright head and a tail.

Choose the correct option from the answers given below :

- (1) A-III, B-IV, C-I, D-II
- (2) A-III, B-IV, C-II, D-I
- (3) A-IV, B-III, C-II, D-I
- (4) A-III, B-II, C-IV, D-I

123 Which of the following gases has the highest concentration in the atmosphere?

- (1) Oxygen
- (2) Carbon dioxide
- (3) Nitrogen
- (4) Sulphur dioxide

124 Global Warming is not responsible for :

- (1) Increase in sea level
- (2) More severe storms
- (3) Increased droughts
- (4) More earthquakes

125 Identify the multicellular microorganism from the following

- A. Bacteria
- B. Aspergillus
- C. Paramecium
- D. Penicillium

Choose the correct option from the following :

- (1) A only
- (2) A and B only
- (3) B, C and D only
- (4) B and D only

*Instructions : Each question has four options. There is only one correct answer to each question. Choose the **MOST APPROPRIATE** option and darken/blacken the corresponding circle on the OMR Answer Sheet.*

SECTION - 'E' : SOCIAL SCIENCE

126 Arrange the following steps of terrace farming in chronological order :

- A. The sides of each plot are raised to retain water.
- B. They cultivate rice on it.
- C. The land on a hill slope is made into flat plots.
- D. Plots are carved out in steps.

(1) A, B, C, D

(2) B, C, D, A

(3) D, B, C, A

(4) C, D, A, B

127 For how many years is a Gram Panchayat elected?

(1) 1

(2) 3

(3) 2

(4) 5

128 Which one of the following may be called a 'dwarf' planet?

(1) Pluto

(2) Saturn

(3) Mercury

(4) Venus

129 Where was the Harappan city of Dholaviri located?

(1) Rajasthan

(2) Rann of Kutch

(3) Gulf of Khambhat

(4) Punjab

130 Which of the following is a conventional source of energy?

- (1) Biogas
- (2) Firewood
- (3) Solar energy
- (4) Wind energy

131 Which of the following is a human made resource?

- (1) Technology
- (2) Water
- (3) Copper
- (4) Natural gas

132 Which of the following is NOT a component of maps?

- (1) Distance
- (2) Direction
- (3) Plan
- (4) Scale

133 Which of the following is NOT a natural ecosystem?

- (1) Forest
- (2) Sea
- (3) Aquarium
- (4) Desert

134 Match List I with List II :

- | List I | List II |
|-------------------|---|
| A. Prejudice | II. Difference in language, food, dress, customs etc. |
| B. Stereotype | III. Judging people negatively. |
| C. Discrimination | IV. Fixing people into one image. |
| D. Diversity | I. Inequality |

Choose the correct option from the answers given below :

- (1) A-I, B-II, C-III, D-IV
- (2) A-II, B-III, C-IV, D-I
- (3) A-III, B-II, C-I, D-IV
- (4) A-IV, B-III, C-II, D-I

135 Which of the following is the main work of Patwari?

- (1) Maintaining law and order
- (2) Measuring land and keeping land records
- (3) Maintaining accounts of the village
- (4) Settles disputes of the villagers

136 Which of the following soldiers was hanged to death on 29 March 1857?

- (1) Bhagat Singh
- (2) Rajguru
- (3) Sukhdev
- (4) Mangal Pandey

137 Where were the Mughal emperor Bahadur Shah Zafar and his wife Begum Zinat Mahal sent to prison?

- (1) Delhi
- (2) Meerut
- (3) Rangoon
- (4) Lucknow

138 Which of the following books contain the ideas of Chanakya?

- (1) Upanishads
- (2) Arthashastra
- (3) Yogdarshan
- (4) Prashasti

139 Who created the sacred space Dharmasa

- (1) Baba Guru Nanak
- (2) Kabir
- (3) Tukaram
- (4) Eknath

140 What is the place where a river flows into another water body called?

- (1) River's mouth
- (2) Delta
- (3) Basin
- (4) Tributary

141 Who began a campaign against the practice of Sati?

- (1) Rammohan Roy
(2) Ishwarchandra Vidynsagar
(3) Jyotirao Phule
(4) Shri Narayana Guru

142 Where is The Tata Iron and Steel Company situated?

- (1) On the banks of Hooghly river
(2) On the banks of Son river
(3) On the banks of Ganges
(4) On the banks of Subarnarekha

143 When was The English Education Act introduced?

- (1) 1735
(2) 1800
(3) 1835
(4) 1870

144 Match List I with List II :

List I	List II
A. Sukta	I. Slave
B. Chariots	II. Sacrifice
C. Yajna	III. Used in battles
D. Dasa	IV. Well said

Choose the correct option from the answers given below :

- (1) A-II, B-IV, C-III, D-I
(2) A-IV, B-I, C-III, D-II
(3) A-III, B-II, C-IV, D-I
(4) A-IV, B-III, C-II, D-I

145 Where is Gangri glacier?

- (1) Assam
(2) Mizoram
(3) Ladakh
(4) Uttarakhand

146 Ox bow lakes are found in :

- (1) Mountains
- (2) Deserts
- (3) Glaciers
- (4) River valleys

147 Match List I with List II :

- | List I | List II |
|----------------|-------------------------------------|
| A. Biotic | I. Rivers, Lakes, Seas, Oceans |
| B. Hydrosphere | II. Thin layer of air |
| C. Atmosphere | III. Hard top layer of the earth |
| D. Lithosphere | IV. The world of living organisms A |

Choose the correct option from the answers given below :

- (1) A-I, B-II, C-III, D-IV
- (2) A-II, B-III, C-I, D-IV
- (3) A-III, B-I, C-II, D-IV
- (4) A-IV, B-I, C-II, D-III

148 Where are mushroom rocks found?

- (1) Valleys
- (2) Glaciers
- (3) Hills
- (4) Deserts

149 Which of the following is formed by the material carried by glaciers?

- (1) Flood plains
- (2) Moraines
- (3) Beach
- (4) Loess

150 Which of the following are the key features of the Constitution of India?

- A. Federalism.
- B. Parliamentary form of Government.
- C. Separation of Powers.

Select the correct answer using the code given below :

- (1) A and B only
- (2) B and C only
- (3) A and C only
- (4) A, B and C